



1. Uzupełnij liczby w pustych okienkach.

1	2		4
---	---	--	---

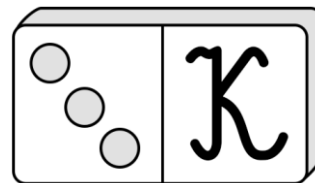
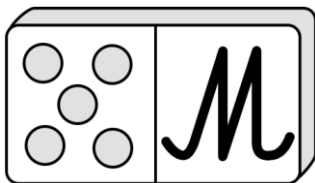
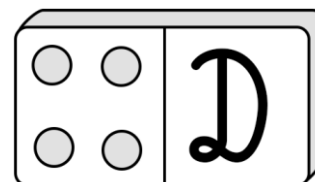
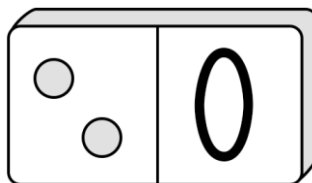
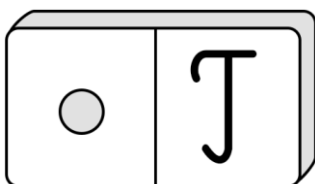
4	5		
---	---	--	--

5			2	
---	--	--	---	--

7		5		
---	--	---	--	--

7				3		
---	--	--	--	---	--	--

2. Policz kropki. Odszukaj odpowiadające im liczby i napisz właściwe litery. Odczytaj hasła i przepisz je w linie.



1	2

4	2	5



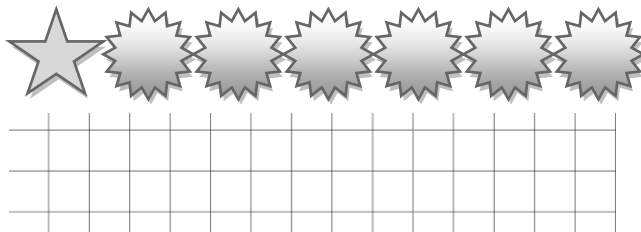
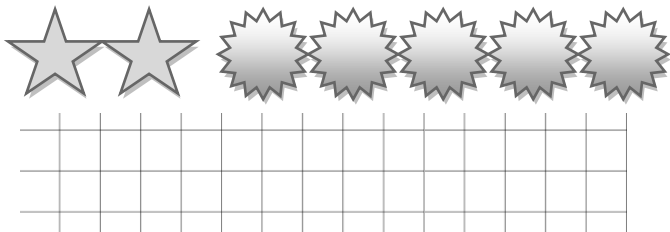
2	1	2

3	2	1

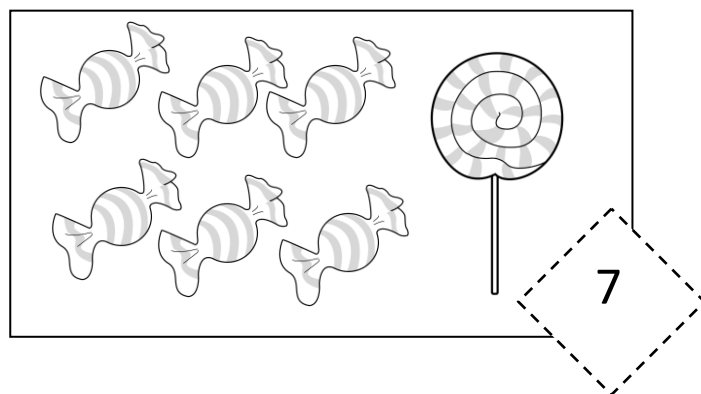
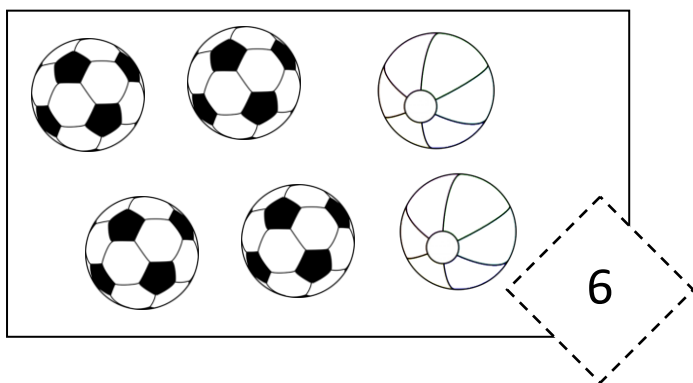




3. Napisz działania i oblicz.



4. Uzupełnij działania.



$$6 = \quad + \quad$$

$$7 = \quad + \quad$$

