


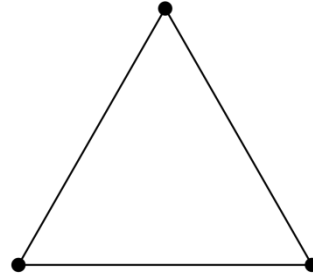


1. Policz ile boków i ile wierzchołków mają figury geometryczne i wpisz ich ilość w kratki.




WIERZCHOŁKI:

BOKI:



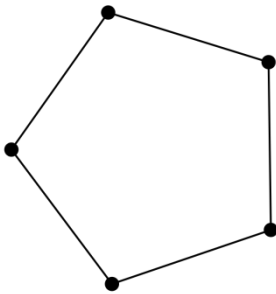
WIERZCHOŁKI:

BOKI:



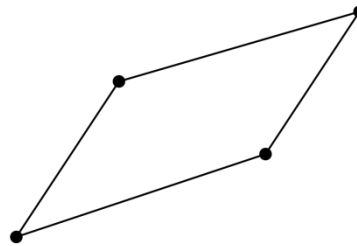
WIERZCHOŁKI:

BOKI:



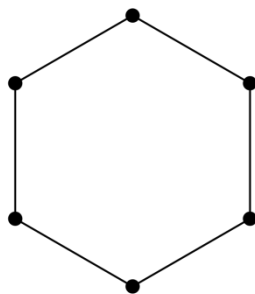
WIERZCHOŁKI:

BOKI:



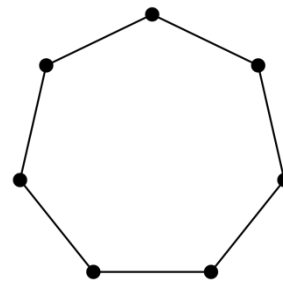
WIERZCHOŁKI:

BOKI:



WIERZCHOŁKI:

BOKI:



WIERZCHOŁKI:

BOKI:

